

## 國立臺灣科技大學 109 學年度碩士班招生試題

系所組別：機械工程系碩士班丙組

科目：熱力與流力

(總分為 100 分)

本試卷共計 5 大題

答案請以科學符號表示，計算精度取至小數點後二位。

## 1. Choice Questions:

1-1 A pitot tube is inserted in an air flow (at STP) to measure the flow speed, as shown in Figure 1. The tube is inserted so that it points upstream into the flow and the pressure sensed by the tube is the stagnation pressure. The static pressure is measured at the same location in the flow, using a wall pressure tap.

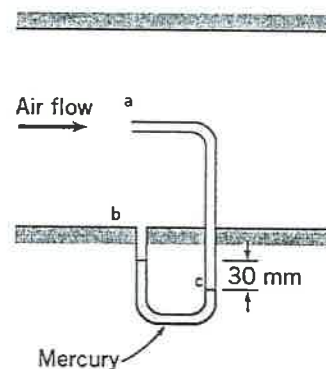


Figure 1.

1-1(A) What might be the appropriate governing equation of the measurement?

(5 points)

- Navier-stoke equation.
- Bernoulli equation.
- Entropy balance equation.

1-1(B) If you want to use the governing equation, which of the following assumption(s) is/are necessary? (Multiple choices, 5 points)

- Steady flow.
- Incompressible flow.
- Flow along a streamline.

1-1(C) Where is stagnation point in the figure 1? (5 points)

- Position a.
- Position b.
- Position c.

1-1(D) If the pressure difference is 30 mm of mercury, determine the flow speed. (The air density is  $1.23 \text{ kg/m}^3$ ; The mercury density is  $13.6 \text{ g/cm}^3$ ) (5 points)

- 80.7 m/s
- 8.07 m/s
- 1.11 m/s



## 國立臺灣科技大學 109 學年度碩士班招生試題

系所組別：機械工程系碩士班丙組

科目：熱力與流力

(總分為 100 分)

1-2 Consider a two-dimensional irrotational flow of inviscid and incompressible fluid in the  $xy$  plane. The velocity component in the  $y$  direction is given by the equation

$$v = 3xy - x^2y$$

1-2(A) Which of the following equation represents the continuity equation? (5 points)

a.  $\nabla \times \vec{V} = 0$

b.  $\nabla \cdot \vec{V} = 0$

c. None of the above.

1-2(B) Determine the velocity component in the  $x$  direction so that the continuity equation is satisfied. (5 points)

a.  $u = -\frac{3}{2}x^2 + \frac{x^3}{3} + f(y)$

b.  $u = \frac{3}{2}x^2 - \frac{x^3}{3} + f(y)$

c.  $u = -\frac{3}{2}x^2 + \frac{x^3}{3}$

1-3 What does the area enclosed by the path of a thermodynamic cycle represent? (2 points)

a. The total energy of the system.

b. thermal efficiency of the cycle.

c. the net work done during the cycle

d. none of above.

1-4 Which one of the following gases has a constant ideal-gas specific heat and does not vary with temperature? (2 points)

a.  $CO_2$ b.  $H_2$ c.  $Ar$ 

d. None of the above.

1-5 According to the state postulate, the number of independent, intensive properties that can completely specify the state of a simple compressible system is (2 points)

a. one

b. two

c. five

d. none of the above.



## 國立臺灣科技大學 109 學年度碩士班招生試題

系所組別：機械工程系碩士班丙組

科 目：熱力與流力

(總分為 100 分)

- 1-6 An air-conditioning system operating on the reversed Carnot cycle is required to remove heat from the room at a rate of 32 kJ/s to maintain a constant temperature of 28°C. If the outdoor temperature is at 36°C, the power required to operate this air-conditioning system is (2 points)
- 0.47 kW
  32. kW
  - 1.8 kW
  - 1.64kW
  - 0.85 kW
- 1-7 An elevator of a building is designed to raise a net mass of 400 kg at a constant speed of 12 m/s using an electric motor. If the elevator is operating at designed conditions, the power required should be (2 points)
- 4.8 kW
  - 47kW
  - 12 kW
  - none of the above.
2. True or False Questions
- 2-1 For a close system undergoes a cycle, the net amount of work always equals to the net amount of heat transfer. (2 points)
- 2-2 For an ideal gas, the enthalpy, internal energy and specific heat are function of temperature only. (2 points)
- 2-3 A throttling process is always irreversible. (2 points)
- 2-4 Compressibility factor,  $Z$ , is a measure of deviation from idea-gas behavior. It can be either larger than 1 or smaller than 1. (2 points)
- 2-5 The Carnot cycle has higher thermal efficiency than any other thermodynamic cycles. (2 points)
3. A sealed journal bearing is formed from concentric cylinders. The inner and outer radii are 27 mm and 29 mm, the journal length is 110 mm, and it turns at 3000 rpm. The gap is filled with oil in laminar motion. The sealed journal bearing can be approximated as parallel plate. The torque needed to turn the journal is 0.3 N · m.
- 3-1 Determine the velocity profile of the sealed journal bearing. (6 points)
- 3-2 Determine the viscosity of the oil. (14 points)



## 國立臺灣科技大學 109 學年度碩士班招生試題

系所組別：機械工程系碩士班丙組

科 目：熱力與流力

4. Steam at 75 kPa and 10 percent quality is contained in a spring-loaded piston-cylinder device with an initial volume of 2 m<sup>3</sup>. Steam is now heated until its volume is 6 m<sup>3</sup> and the pressure is 250 kPa. Please answer the following questions with the property table provided below.


4-1 Determine the heat transferred to the system. (5 points)

4-2 Determine the work produced by the steam during this process. (5 points)

TABLE A-5

Saturated water—Pressure table

Press., P kPa	Sat. temp., T <sub>sat</sub> °C	Specific volume, m <sup>3</sup> /kg		Internal energy, kJ/kg			Enthalpy, kJ/kg			Entropy, kJ/kg·K		
		Sat. liquid, v <sub>f</sub>	Sat. vapor, v <sub>g</sub>	Sat. liquid, u <sub>f</sub>	Evap., u <sub>fg</sub>	Sat. vapor, u <sub>g</sub>	Sat. liquid, h <sub>f</sub>	Evap., h <sub>fg</sub>	Sat. vapor, h <sub>g</sub>	Sat. liquid, s <sub>f</sub>	Evap., s <sub>fg</sub>	Sat. vapor, s <sub>g</sub>
1.0	6.97	0.001000	129.19	29.302	2355.2	2384.5	29.303	2484.4	2513.7	0.1059	8.8690	8.9749
1.5	13.02	0.001001	87.964	54.686	2338.1	2392.8	54.688	2470.1	2524.7	0.1956	8.6314	8.8270
2.0	17.50	0.001001	66.990	73.431	2325.5	2398.9	73.433	2459.5	2532.9	0.2606	8.4621	8.7227
2.5	21.08	0.001002	54.242	88.422	2315.4	2403.8	88.424	2451.0	2539.4	0.3118	8.3302	8.6421
3.0	24.08	0.001003	45.654	100.98	2306.9	2407.9	100.98	2443.9	2544.8	0.3543	8.2222	8.5765
4.0	28.96	0.001004	34.791	121.39	2293.1	2414.5	121.39	2432.3	2553.7	0.4224	8.0510	8.4734
5.0	32.87	0.001005	28.185	137.75	2282.1	2419.8	137.75	2423.0	2560.7	0.4762	7.9176	8.3938
7.5	40.29	0.001008	19.233	168.74	2261.1	2429.8	168.75	2405.3	2574.0	0.5763	7.6738	8.2501
10	45.81	0.001010	14.670	191.79	2245.4	2437.2	191.81	2392.1	2583.9	0.6492	7.4996	8.1488
15	53.97	0.001014	10.020	225.93	2222.1	2448.0	225.94	2372.3	2598.3	0.7549	7.2522	8.0071
20	60.06	0.001017	7.6481	251.40	2204.6	2456.0	251.42	2357.5	2608.9	0.8320	7.0752	7.9073
25	64.96	0.001020	6.2034	271.93	2190.4	2462.4	271.96	2345.5	2617.5	0.8932	6.9370	7.8302
30	69.09	0.001022	5.2287	289.24	2178.5	2467.7	289.27	2335.3	2624.6	0.9441	6.8234	7.7675
40	75.86	0.001026	3.9933	317.58	2158.8	2476.3	317.62	2318.4	2636.1	1.0261	6.6430	7.6691
50	81.32	0.001030	3.2403	340.49	2142.7	2483.2	340.54	2304.7	2645.2	1.0912	6.5019	7.5931
75	91.76	0.001037	2.2172	384.36	2111.8	2496.1	384.44	2278.0	2662.4	1.2132	6.2426	7.4558
100	99.61	0.001043	1.6941	417.40	2088.2	2505.6	417.51	2257.5	2675.0	1.3028	6.0562	7.3589
101.325	99.97	0.001043	1.6734	418.95	2087.0	2506.0	419.06	2256.5	2675.6	1.3069	6.0476	7.3545
125	105.97	0.001048	1.3750	444.23	2068.8	2513.0	444.36	2240.6	2684.9	1.3741	5.9100	7.2841
150	111.35	0.001053	1.1594	466.97	2052.3	2519.2	467.13	2226.0	2693.1	1.4337	5.7894	7.2231
175	116.04	0.001057	1.0037	486.82	2037.7	2524.5	487.01	2213.1	2700.2	1.4850	5.6865	7.1716
200	120.21	0.001061	0.88578	504.50	2024.6	2529.1	504.71	2201.6	2706.3	1.5302	5.5968	7.1270
225	123.97	0.001064	0.79329	520.47	2012.7	2533.2	520.71	2191.0	2711.7	1.5706	5.5171	7.0877
250	127.41	0.001067	0.71873	535.08	2001.8	2536.8	535.35	2181.2	2716.5	1.6072	5.4453	7.0525
275	130.58	0.001070	0.65732	548.57	1991.6	2540.1	548.86	2172.0	2720.9	1.6408	5.3800	7.0207
300	133.52	0.001073	0.60582	561.11	1982.1	2543.2	561.43	2163.5	2724.9	1.6717	5.3200	6.9917
325	136.27	0.001076	0.56199	572.84	1973.1	2545.9	573.19	2155.4	2728.6	1.7005	5.2645	6.9650
350	138.86	0.001079	0.52422	583.89	1964.6	2548.5	584.26	2147.7	2732.0	1.7274	5.2128	6.9402
375	141.30	0.001081	0.49133	594.32	1956.6	2550.9	594.73	2140.4	2735.1	1.7526	5.1645	6.9171
400	143.61	0.001084	0.46242	604.22	1948.9	2553.1	604.66	2133.4	2738.1	1.7765	5.1191	6.8955
450	147.90	0.001088	0.41392	622.65	1934.5	2557.1	623.14	2120.3	2743.4	1.8205	5.0356	6.8561
500	151.83	0.001093	0.37483	639.54	1921.2	2560.7	640.09	2108.0	2748.1	1.8604	4.9603	6.8207
550	155.46	0.001097	0.34261	655.16	1908.8	2563.9	655.77	2096.6	2752.4	1.8970	4.8916	6.7886
600	158.83	0.001101	0.31560	669.72	1897.1	2566.8	670.38	2085.8	2756.2	1.9308	4.8285	6.7593
650	161.98	0.001104	0.29260	683.37	1886.1	2569.4	684.08	2075.5	2759.6	1.9623	4.7699	6.7322
700	164.95	0.001108	0.27278	696.23	1875.6	2571.8	697.00	2065.8	2762.8	1.9918	4.7153	6.7071
750	167.75	0.001111	0.25552	708.40	1865.6	2574.0	709.24	2056.4	2765.7	2.0195	4.6642	6.6837



## 國立臺灣科技大學 109 學年度碩士班招生試題

系所組別：機械工程系碩士班丙組

科目：熱力與流力

5. An ideal Brayton cycle is made up of 4 internally reversible processes using air as the working fluid, as shown in the T-s and P-v diagrams (figure 2):

1-2 isentropic compression (compressor)

2-3 constant-pressure heat addition

3-4 isentropic expansion (turbine)

4-1 constant-pressure heat rejection

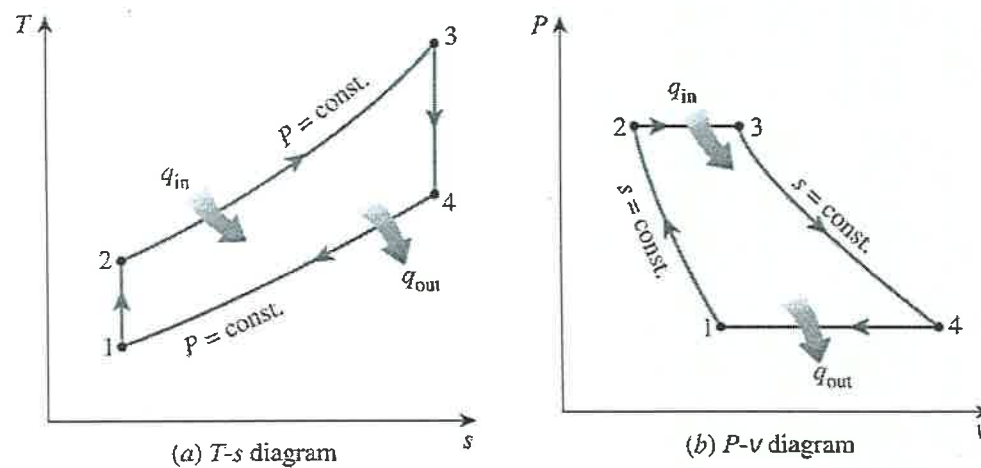


Figure 2.

The pressure ratio (exit to inlet) of the compressor and turbine are 9 and 1/9, respectively. The gas temperature at the compressor inlet is 300K and the turbine inlet temperature is 1400K. Please answer the following questions using the ideal gas air property table provided below.

- 5-1 Determine the gas temperatures at the exits of the compressor and turbine. (10 points)
- 5-2 Determine the thermal Efficiency of this cycle. (5 points)
- 5-3 Determine the thermal efficiency of this cycle if the compressor and turbine both have the isentropic efficiency of 85%? (5 points)



## 國立臺灣科技大學 109 學年度碩士班招生試題

系所組別：機械工程系碩士班丙組

科目：熱力與流力

(總分為 100 分)

Ideal-gas properties of air						Ideal-gas properties of air					
T K	h kJ/kg	$P_r$	u kJ/kg	$v_r$	$s^\circ$ kJ/kg·K	T K	h kJ/kg	$P_r$	u kJ/kg	$v_r$	$s^\circ$ kJ/kg·K
200	199.97	0.3363	142.56	1707.0	1.29559	580	586.04	14.38	419.55	115.7	2.37348
210	209.97	0.3987	149.69	1512.0	1.34444	590	596.52	15.31	427.15	110.6	2.39140
220	219.97	0.4690	156.82	1346.0	1.39105	600	607.02	16.28	434.78	105.8	2.40902
230	230.02	0.5477	164.00	1205.0	1.43557	610	617.53	17.30	442.42	101.2	2.42644
240	240.02	0.6355	171.13	1084.0	1.47824	620	628.07	18.36	450.09	96.92	2.44356
250	250.05	0.7329	178.28	979.0	1.51917	630	638.63	19.84	457.78	92.84	2.46048
260	260.09	0.8405	185.45	887.8	1.55848	640	649.22	20.64	465.50	88.99	2.47716
270	270.11	0.9590	192.60	808.0	1.59634	650	659.84	21.86	473.25	85.34	2.49364
280	280.13	1.0889	199.75	738.0	1.63279	660	670.47	23.13	481.01	81.89	2.50985
285	285.14	1.1584	203.33	706.1	1.65055	670	681.14	24.46	488.81	78.61	2.52589
290	290.16	1.2311	206.91	676.1	1.66802	680	691.82	25.85	496.62	75.50	2.54175
295	295.17	1.3068	210.49	647.9	1.68515	690	702.52	27.29	504.45	72.56	2.55731
298	298.18	1.3543	212.64	631.9	1.69528	700	713.27	28.80	512.33	69.76	2.57277
300	300.19	1.3860	214.07	621.2	1.70203	710	724.04	30.38	520.23	67.07	2.58810
305	305.22	1.4686	217.67	596.0	1.71865	720	734.82	32.02	528.14	64.53	2.60319
310	310.24	1.5546	221.25	572.3	1.73498	730	745.62	33.72	536.07	62.13	2.61803
315	315.27	1.6442	224.85	549.8	1.75106	740	756.44	35.50	544.02	59.82	2.63280
320	320.29	1.7375	228.42	528.6	1.76690	750	767.29	37.35	551.99	57.63	2.64737
325	325.31	1.8345	232.02	508.4	1.78249	760	778.18	39.27	560.01	55.54	2.66176
330	330.34	1.9352	235.61	489.4	1.79783	780	800.03	43.35	576.12	51.64	2.69013
340	340.42	2.149	242.82	454.1	1.82790	800	821.95	47.75	592.30	48.08	2.71787
350	350.49	2.379	250.02	422.2	1.85708	820	843.98	52.59	608.59	44.84	2.74504
360	360.58	2.626	257.24	393.4	1.88543	840	866.08	57.60	624.95	41.85	2.77170
370	370.67	2.892	264.46	367.2	1.91313	860	888.27	63.09	641.40	39.12	2.79783
380	380.77	3.176	271.69	343.4	1.94001	880	910.56	68.98	657.95	36.61	2.82344
390	390.88	3.481	278.93	321.5	1.96633	900	932.93	75.29	674.58	34.31	2.84856
400	400.98	3.806	286.16	301.6	1.99194	920	955.38	82.05	691.28	32.18	2.87324
410	411.12	4.153	293.43	283.3	2.01699	940	977.92	89.28	708.08	30.22	2.89748
420	421.26	4.522	300.69	266.6	2.04142	960	1000.55	97.00	725.02	28.40	2.92128
430	431.43	4.915	307.99	251.1	2.06533	980	1023.25	105.2	741.98	26.73	2.94468
440	441.61	5.332	315.30	236.8	2.08870	1000	1046.04	114.0	758.94	25.17	2.96770
450	451.80	5.775	322.62	223.6	2.11161	1020	1068.89	123.4	776.10	23.72	2.99034
460	462.02	6.245	329.97	211.4	2.13407	1040	1091.85	133.3	793.36	23.29	3.01260
470	472.24	6.742	337.32	200.1	2.15604	1060	1114.86	143.9	810.62	21.14	3.03449
480	482.49	7.268	344.70	189.5	2.17760	1080	1137.89	155.2	827.88	19.98	3.05608
490	492.74	7.824	352.08	179.7	2.19876	1100	1161.07	167.1	845.33	18.896	3.07732
500	503.02	8.411	359.49	170.6	2.21952	1120	1184.28	179.7	862.79	17.886	3.09825
510	513.32	9.031	366.92	162.1	2.23993	1140	1207.57	193.1	880.35	16.946	3.11883
520	523.63	9.684	374.36	154.1	2.25997	1160	1230.92	207.2	897.91	16.064	3.13916
530	533.98	10.37	381.84	146.7	2.27967	1180	1254.34	222.2	915.57	15.241	3.15916
540	544.35	11.10	389.34	139.7	2.29906	1200	1277.79	238.0	933.33	14.470	3.17888
550	555.74	11.86	396.86	133.1	2.31809	1220	1301.31	254.7	951.09	13.747	3.19834
560	565.17	12.66	404.42	127.0	2.33685	1240	1324.93	272.3	968.95	13.069	3.21751
570	575.59	13.50	411.97	121.2	2.35531						
1260	1348.55	290.8	986.90	12.435	3.23638	1600	1757.57	791.2	1298.30	5.804	3.52364
1280	1372.24	310.4	1004.76	11.835	3.25510	1620	1782.00	834.1	1316.96	5.574	3.53879
1300	1395.97	330.9	1022.82	11.275	3.27345	1640	1806.46	878.9	1335.72	5.355	3.55381
1320	1419.76	352.5	1040.88	10.747	3.29160	1660	1830.96	925.6	1354.48	5.147	3.56867
1340	1443.60	375.3	1058.94	10.247	3.30959	1680	1855.50	974.2	1373.24	4.949	3.58335
1360	1467.49	399.1	1077.10	9.780	3.32724	1700	1880.1	1025	1392.7	4.761	3.5979
1380	1491.44	424.2	1095.26	9.337	3.34474	1750	1941.6	1161	1439.8	4.328	3.6336
1400	1515.42	450.5	1113.52	8.919	3.36200	1800	2003.3	1310	1487.2	3.994	3.6684
1420	1539.44	478.0	1131.77	8.526	3.37901	1850	2065.3	1475	1534.9	3.601	3.7023
1440	1563.51	506.9	1150.13	8.153	3.39586	1900	2127.4	1655	1582.6	3.295	3.7354
1460	1587.63	537.1	1168.49	7.801	3.41247	1950	2189.7	1852	1630.6	3.022	3.7677
1480	1611.79	568.8	1186.95	7.468	3.42892	2000	2252.1	2068	1678.7	2.776	3.7994
1500	1635.97	601.9	1205.41	7.152	3.44516	2050	2314.6	2303	1726.8	2.555	3.8303
1520	1660.23	636.5	1223.87	6.854	3.46120	2100	2377.7	2559	1775.3	2.356	3.8605
1540	1684.51	672.8	1242.43	6.569	3.47712	2150	2440.3	2837	1823.8	2.175	3.8901
1560	1708.82	710.5	1260.99	6.301	3.49276	2200	2503.2	3138	1872.4	2.012	3.9191
1580	1733.17	750.0	1279.65	6.046	3.50829	2250	2566.4	3464	1921.3	1.864	3.9474

