

國立臺灣科技大學
113學年度碩士班招生
試題

系所組別：0120工業管理系碩士班乙組

科 目：統計學

<<501202>>



國立臺灣科技大學 113 學年度碩士班招生試題

系所組別：工業管理系碩士班甲組、乙組

科目：統計學

(總分為 100 分；所有試題務必於答案卷內頁依序作答，否則不予計分)

(Total 100 Points.) *There are 7 Problems in this exam. Show intermediate steps and formulas for partial credit. You must explain how you compute your results or answers for full credit.*

1. (20%) Let X , Y and Z be three random variables having the joint probability density distribution given by:

$$f(x, y, z) = \begin{cases} cxyz, & 0 < x < 2, 1 < y < 3, 2 < z < 4, \\ 0, & \text{otherwise.} \end{cases}$$

- (1) (5%) Determine the value of c that makes $f_{XYZ}(x, y, z)$ a valid joint probability density function.
- (2) (5%) Calculate the probability $\mathbb{P}(X \geq 1)$.
- (3) (5%) Calculate the probability $\mathbb{P}(Y \leq 2)$.
- (4) (5%) Calculate the probability $\mathbb{P}(2.5 \leq Z \leq 3.5)$.


2. (20%) A company manufactures electronic components, and a random sample of 15 items is taken from each production batch for quality control inspection. The company uses acceptance sampling plans, and the process is designed such that the proportion of defective items is assumed to be very small. The acceptance criteria are as follows:

- If none of the 15 items in the sample is defective, the entire production batch is accepted.
- A more extensive inspection is conducted if one or more items are found to be defective.

The probability of a single electronic component being defective is modeled as follows:

$$\mathbb{P}(\text{Defective}) = 0.02$$

- (1) (5%) Calculate the probability that a randomly selected sample of 15 items contains no defective items.
 - (2) (5%) Determine the probability that a production batch is accepted without further inspection.
 - (3) (5%) If a production batch is not accepted based on the initial sample, the company conducts a more detailed inspection by examining 30 additional items. Calculate the probability that this extended sample is accepted, assuming the defect rate remains the same.
 - (4) (5%) Suppose the company wants to decrease the probability of accepting a defective batch without increasing the initial sample size. Propose one alternative approach or modification to the acceptance sampling plan that achieves this objective.
3. (10%) In a call center, operators answer customer inquiries. On average, each operator successfully resolves 85% of the inquiries. If a random sample of 120 inquiries handled by a particular operator is considered, use the normal approximation to find the probability that the operator successfully resolves more than 100 inquiries.



國立臺灣科技大學 113 學年度碩士班招生試題

系所組別：工業管理系碩士班甲組、乙組

科目：統計學

(總分為 100 分；所有試題務必於答案卷內頁依序作答，否則不予計分)

4. (15%) The following data represent the running times (in minutes) of films produced by two motion-picture companies:

Company 1	130	110	120	100	110	100	100	110	110
Company 2	110	90	90	70	80	90	100		

Assume that the data are normally distributed.

- (1) (5%) Please test whether the variances of the time of the films produced by different companies are equal. (Please clearly state the null hypothesis, the alternative hypothesis, and the test statistic, and use $\alpha = 0.10$.)
 - (2) (10%) Whether the average running time of films produced by company 1 exceeds the average running time of films produced by company 2 by 10 minutes? (Please clearly state the null hypothesis, the alternative hypothesis, and the test statistic, and use $\alpha = 0.10$.)
5. (15%) A manager is trying to determine which of the three mobile applications (i.e., apps) is the best for consumers. He thinks that the time (in minutes) it takes a consumer to master the use of a particular mobile application may be influenced by gender. He conducted an experiment and the analysis of variance (ANOVA) table is as follows.

	SS	DF	MS	F
app	50	2	25	2.5
gender	70	()	70	7
app \times gender	90	()	()	()
Error	120	12	()	
Total	330	17		

- (1) (5%) Please complete and show the whole ANOVA table.
 - (2) (5%) Please test the app \times gender interaction effect and interpret the results. (Please clearly state the null hypothesis, the alternative hypothesis, and the test statistic, and use $\alpha = 0.05$).
 - (3) (5%) What is the purpose and concern of conducting multiple comparisons in ANOVA?
6. (10%) A survey was conducted in Taipei, Taichung, and Kaoshiung to determine the preference of voters on different parties. A poll of 200 voters from each of these cities yield the following results.

City	Party Preference			
	Party A	Party B	Party C	Undecided
Taipei	50	55	45	50
Taichung	60	55	45	40
Kaoshiung	70	40	60	30



At the 0.05 level of significance, whether the voters of three cities are homogeneous with respect to their preference on different parties.

7. (10%) Let X_1, X_2, \dots, X_n be a random sample from a distribution with the probability density function

$$f(x) = \begin{cases} \frac{1}{\Gamma(\alpha)\beta^\alpha} x^{\alpha-1} e^{-\frac{x}{\beta}}, & x > 0, \\ 0, & \text{otherwise,} \end{cases}$$

where $\alpha > 0$ and $\beta > 0$. Please find the maximum likelihood estimator of β , assuming α is known.

國立臺灣科技大學 113 學年度碩士班招生試題

系所組別：工業管理系碩士班甲組、乙組
科目：統計學

(總分為 100 分；所有試題務必於答案卷內頁依序作答，否則不予計分)

Table A.3 Normal Probability Table

z	.00	.01	.02	.03	.04	.05	.06	.07	.08	.09
-3.4	0.0003	0.0003	0.0003	0.0003	0.0003	0.0003	0.0003	0.0003	0.0003	0.0002
-3.3	0.0005	0.0005	0.0005	0.0004	0.0004	0.0004	0.0004	0.0004	0.0004	0.0003
-3.2	0.0007	0.0007	0.0006	0.0006	0.0006	0.0006	0.0006	0.0006	0.0005	0.0005
-3.1	0.0010	0.0009	0.0009	0.0009	0.0008	0.0008	0.0008	0.0008	0.0007	0.0007
-3.0	0.0013	0.0013	0.0013	0.0012	0.0012	0.0011	0.0011	0.0011	0.0010	0.0010
-2.9	0.0019	0.0018	0.0018	0.0017	0.0016	0.0016	0.0015	0.0015	0.0014	0.0014
-2.8	0.0026	0.0025	0.0024	0.0023	0.0023	0.0022	0.0021	0.0021	0.0020	0.0019
-2.7	0.0035	0.0034	0.0033	0.0033	0.0031	0.0030	0.0029	0.0028	0.0027	0.0026
-2.6	0.0047	0.0045	0.0044	0.0043	0.0041	0.0040	0.0039	0.0038	0.0037	0.0036
-2.5	0.0062	0.0060	0.0059	0.0057	0.0055	0.0054	0.0052	0.0051	0.0049	0.0048
-2.4	0.0082	0.0080	0.0078	0.0075	0.0073	0.0071	0.0069	0.0068	0.0066	0.0064
-2.3	0.0107	0.0104	0.0102	0.0099	0.0096	0.0094	0.0091	0.0089	0.0087	0.0084
-2.2	0.0139	0.0136	0.0132	0.0129	0.0125	0.0122	0.0119	0.0116	0.0113	0.0110
-2.1	0.0179	0.0174	0.0170	0.0166	0.0162	0.0158	0.0154	0.0150	0.0146	0.0143
-2.0	0.0228	0.0222	0.0217	0.0212	0.0207	0.0202	0.0197	0.0192	0.0188	0.0183
-1.9	0.0287	0.0281	0.0274	0.0268	0.0262	0.0256	0.0250	0.0244	0.0239	0.0233
-1.8	0.0359	0.0351	0.0344	0.0336	0.0329	0.0322	0.0314	0.0307	0.0301	0.0294
-1.7	0.0446	0.0436	0.0427	0.0418	0.0409	0.0401	0.0392	0.0384	0.0375	0.0367
-1.6	0.0548	0.0537	0.0526	0.0516	0.0505	0.0495	0.0485	0.0475	0.0465	0.0455
-1.5	0.0668	0.0655	0.0643	0.0630	0.0618	0.0606	0.0594	0.0582	0.0571	0.0559
-1.4	0.0808	0.0793	0.0778	0.0764	0.0749	0.0735	0.0721	0.0708	0.0694	0.0681
-1.3	0.0968	0.0951	0.0934	0.0918	0.0901	0.0885	0.0869	0.0853	0.0838	0.0823
-1.2	0.1151	0.1131	0.1112	0.1093	0.1075	0.1056	0.1038	0.1020	0.1003	0.0985
-1.1	0.1357	0.1335	0.1314	0.1292	0.1271	0.1251	0.1230	0.1210	0.1190	0.1170
-1.0	0.1587	0.1562	0.1539	0.1515	0.1492	0.1469	0.1446	0.1423	0.1401	0.1379
-0.9	0.1841	0.1814	0.1788	0.1762	0.1736	0.1711	0.1685	0.1660	0.1635	0.1611
-0.8	0.2119	0.2090	0.2061	0.2033	0.2005	0.1977	0.1949	0.1922	0.1894	0.1867
-0.7	0.2420	0.2389	0.2358	0.2327	0.2296	0.2266	0.2236	0.2206	0.2177	0.2148
-0.6	0.2743	0.2709	0.2676	0.2643	0.2611	0.2578	0.2546	0.2514	0.2483	0.2451
-0.5	0.3085	0.3050	0.3015	0.2981	0.2946	0.2912	0.2877	0.2843	0.2810	0.2776
-0.4	0.3446	0.3409	0.3372	0.3336	0.3300	0.3264	0.3228	0.3192	0.3156	0.3121
-0.3	0.3821	0.3783	0.3745	0.3707	0.3669	0.3632	0.3594	0.3557	0.3520	0.3483
-0.2	0.4207	0.4168	0.4129	0.4090	0.4052	0.4013	0.3974	0.3936	0.3897	0.3859
-0.1	0.4602	0.4562	0.4522	0.4483	0.4443	0.4404	0.4364	0.4325	0.4286	0.4247
-0.0	0.5000	0.4960	0.4920	0.4880	0.4840	0.4801	0.4761	0.4721	0.4681	0.4641



735

736

Table A.3 (continued) Areas under the Normal Curve

z	.00	.01	.02	.03	.04	.05	.06	.07	.08	.09
0.0	0.5000	0.5040	0.5080	0.5120	0.5160	0.5199	0.5239	0.5279	0.5319	0.5359
0.1	0.5398	0.5438	0.5478	0.5517	0.5557	0.5596	0.5636	0.5675	0.5714	0.5753
0.2	0.5793	0.5832	0.5871	0.5910	0.5948	0.5987	0.6026	0.6064	0.6103	0.6141
0.3	0.6179	0.6217	0.6255	0.6293	0.6331	0.6368	0.6406	0.6443	0.6480	0.6517
0.4	0.6554	0.6591	0.6628	0.6664	0.6700	0.6736	0.6772	0.6808	0.6844	0.6879
0.5	0.6915	0.6950	0.6985	0.7019	0.7054	0.7088	0.7123	0.7157	0.7190	0.7224
0.6	0.7257	0.7291	0.7324	0.7357	0.7389	0.7422	0.7454	0.7486	0.7517	0.7549
0.7	0.7580	0.7611	0.7642	0.7673	0.7704	0.7734	0.7764	0.7794	0.7823	0.7852
0.8	0.7881	0.7910	0.7939	0.7967	0.7995	0.8023	0.8051	0.8078	0.8106	0.8133
0.9	0.8159	0.8186	0.8212	0.8238	0.8264	0.8289	0.8315	0.8340	0.8365	0.8389
1.0	0.8413	0.8438	0.8461	0.8485	0.8508	0.8531	0.8554	0.8577	0.8599	0.8621
1.1	0.8643	0.8665	0.8686	0.8708	0.8729	0.8749	0.8770	0.8790	0.8810	0.8830
1.2	0.8849	0.8869	0.8888	0.8907	0.8925	0.8944	0.8962	0.8980	0.8997	0.9015
1.3	0.9032	0.9049	0.9066	0.9082	0.9099	0.9115	0.9131	0.9147	0.9162	0.9177
1.4	0.9192	0.9207	0.9222	0.9236	0.9251	0.9265	0.9279	0.9292	0.9306	0.9319
1.5	0.9332	0.9345	0.9357	0.9370	0.9382	0.9394	0.9406	0.9418	0.9429	0.9441
1.6	0.9452	0.9463	0.9474	0.9484	0.9495	0.9505	0.9515	0.9525	0.9535	0.9545
1.7	0.9554	0.9564	0.9573	0.9582	0.9591	0.9599	0.9608	0.9616	0.9625	0.9633
1.8	0.9641	0.9649	0.9656	0.9664	0.9671	0.9678	0.9686	0.9693	0.9699	0.9706
1.9	0.9713	0.9719	0.9726	0.9732	0.9738	0.9744	0.9750	0.9756	0.9761	0.9767
2.0	0.9772	0.9778	0.9783	0.9788	0.9793	0.9798	0.9803	0.9808	0.9812	0.9817
2.1	0.9821	0.9826	0.9830	0.9834	0.9838	0.9842	0.9846	0.9850	0.9854	0.9857
2.2	0.9861	0.9864	0.9868	0.9871	0.9875	0.9878	0.9881	0.9884	0.9887	0.9890
2.3	0.9893	0.9896	0.9898	0.9901	0.9904	0.9906	0.9909	0.9911	0.9913	0.9916
2.4	0.9918	0.9920	0.9922	0.9925	0.9927	0.9929	0.9931	0.9932	0.9934	0.9936
2.5	0.9938	0.9940	0.9941	0.9943	0.9945	0.9946	0.9948	0.9949	0.9951	0.9952
2.6	0.9953	0.9955	0.9956	0.9957	0.9959	0.9960	0.9961	0.9962	0.9963	0.9964
2.7	0.9965	0.9966	0.9967	0.9968	0.9969	0.9970	0.9971	0.9972	0.9973	0.9974
2.8	0.9974	0.9975	0.9976	0.9977	0.9978	0.9979	0.9979	0.9980	0.9981	0.9981
2.9	0.9981	0.9982	0.9982	0.9983	0.9984	0.9984	0.9985	0.9985	0.9986	0.9986
3.0	0.9987	0.9987	0.9987	0.9988	0.9988	0.9989	0.9989	0.9989	0.9990	0.9990
3.1	0.9990	0.9991	0.9991	0.9991	0.9992	0.9992	0.9992	0.9992	0.9993	0.9993
3.2	0.9993	0.9993	0.9994	0.9994	0.9994	0.9994	0.9994	0.9995	0.9995	0.9995
3.3	0.9995	0.9995	0.9995	0.9996	0.9996	0.9996	0.9996	0.9996	0.9997	0.9997
3.4	0.9997	0.9997	0.9997	0.9997	0.9997	0.9997	0.9997	0.9997	0.9997	0.9998

Appendix A Statistical Tables and Proofs



國立臺灣科技大學 113 學年度碩士班招生試題

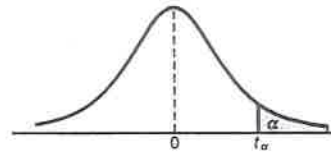
系所組別：工業管理系碩士班甲組、乙組

科 目：統計學


(總分為 100 分；所有試題務必於答案卷內頁依序作答，否則不予計分)

Table A.4 Student *t*-Distribution Probability Table

737

Table A.4 Critical Values of the *t*-Distribution

<i>v</i>	α						
	0.40	0.30	0.20	0.15	0.10	0.05	0.025
1	0.325	0.727	1.376	1.963	3.078	6.314	12.706
2	0.289	0.617	1.061	1.386	1.886	2.920	4.303
3	0.277	0.584	0.978	1.250	1.638	2.353	3.182
4	0.271	0.569	0.941	1.190	1.533	2.132	2.776
5	0.267	0.559	0.920	1.156	1.476	2.015	2.571
6	0.265	0.553	0.906	1.134	1.440	1.943	2.447
7	0.263	0.549	0.896	1.119	1.415	1.895	2.365
8	0.262	0.546	0.889	1.108	1.397	1.860	2.306
9	0.261	0.543	0.883	1.100	1.383	1.833	2.262
10	0.260	0.542	0.879	1.093	1.372	1.812	2.228
11	0.260	0.540	0.876	1.088	1.363	1.796	2.201
12	0.259	0.539	0.873	1.083	1.356	1.782	2.179
13	0.259	0.538	0.870	1.079	1.350	1.771	2.160
14	0.258	0.537	0.868	1.076	1.345	1.761	2.145
15	0.258	0.536	0.866	1.074	1.341	1.753	2.131
16	0.258	0.535	0.865	1.071	1.337	1.746	2.120
17	0.257	0.534	0.863	1.069	1.333	1.740	2.110
18	0.257	0.534	0.862	1.067	1.330	1.734	2.101
19	0.257	0.533	0.861	1.066	1.328	1.729	2.093
20	0.257	0.533	0.860	1.064	1.325	1.725	2.086
21	0.257	0.532	0.859	1.063	1.323	1.721	2.080
22	0.256	0.532	0.858	1.061	1.321	1.717	2.074
23	0.256	0.532	0.858	1.060	1.319	1.714	2.069
24	0.256	0.531	0.857	1.059	1.318	1.711	2.064
25	0.256	0.531	0.856	1.058	1.316	1.708	2.060
26	0.256	0.531	0.856	1.058	1.315	1.706	2.056
27	0.256	0.531	0.855	1.057	1.314	1.703	2.052
28	0.256	0.530	0.855	1.056	1.313	1.701	2.048
29	0.256	0.530	0.854	1.055	1.311	1.699	2.045
30	0.256	0.530	0.854	1.055	1.310	1.697	2.042
40	0.255	0.529	0.851	1.050	1.303	1.684	2.021
60	0.254	0.527	0.848	1.045	1.296	1.671	2.000
120	0.254	0.526	0.845	1.041	1.289	1.658	1.980
∞	0.253	0.524	0.842	1.036	1.282	1.645	1.960



國立臺灣科技大學 113 學年度碩士班招生試題

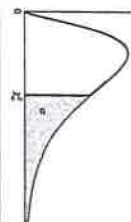
系所組別：工業管理系碩士班甲組、乙組
 科目：統計學

(總分為 100 分；所有試題務必於答案卷內頁依序作答，否則不予計分)

Table A.5 Chi-Squared Distribution Probability Table

739

v	α									
	0.995	0.99	0.98	0.975	0.95	0.90	0.80	0.75	0.70	0.50
1	0.004393	0.009157	0.013628	0.018182	0.022811	0.027500	0.032244	0.037038	0.041877	0.046764
2	0.0100	0.0201	0.0300	0.0400	0.0500	0.0600	0.0700	0.0800	0.0900	0.1000
3	0.0717	0.115	0.185	0.216	0.352	0.584	1.005	1.213	1.424	2.366
4	0.207	0.297	0.429	0.484	0.711	1.064	1.649	1.923	2.195	3.357
5	0.412	0.554	0.752	0.831	1.145	1.610	2.343	2.675	3.000	4.351
6	0.676	0.872	1.134	1.237	1.635	2.204	3.070	3.455	3.828	5.348
7	0.989	1.239	1.564	1.690	2.167	2.833	3.822	4.255	4.671	6.346
8	1.344	1.647	2.032	2.180	2.733	3.490	4.594	5.071	5.527	7.344
9	1.735	2.088	2.532	2.700	3.325	4.168	5.380	5.899	6.393	8.343
10	2.156	2.558	3.059	3.247	3.940	4.865	6.179	6.737	7.267	9.342
11	2.603	3.053	3.609	3.816	4.575	5.578	6.989	7.584	8.148	10.341
12	3.074	3.571	4.178	4.404	5.226	6.304	7.807	8.438	9.034	11.340
13	3.565	4.107	4.765	5.009	5.892	7.041	8.634	9.299	9.926	12.340
14	4.075	4.660	5.368	5.629	6.571	7.790	9.467	10.165	10.821	13.339
15	4.601	5.229	5.985	6.262	7.261	8.547	10.307	11.037	11.721	14.339
16	5.142	5.812	6.614	6.908	7.962	9.312	11.152	11.912	12.624	15.338
17	5.697	6.408	7.255	7.564	8.672	10.085	12.002	12.792	13.531	16.338
18	6.265	7.015	7.906	8.231	9.390	10.865	12.857	13.675	14.440	17.338
19	6.844	7.633	8.567	8.907	10.117	11.651	13.716	14.562	15.352	18.338
20	7.434	8.260	9.237	9.591	10.851	12.443	14.578	15.452	16.266	19.337
21	8.034	8.897	9.915	10.283	11.591	13.240	15.445	16.344	17.182	20.337
22	8.643	9.542	10.600	10.982	12.338	14.041	16.314	17.240	18.101	21.337
23	9.260	10.196	11.293	11.689	13.091	14.848	17.187	18.137	19.021	22.337
24	9.886	10.886	11.992	12.401	13.848	15.659	18.062	19.037	19.943	23.337
25	10.520	11.524	12.697	13.120	14.611	16.473	18.940	19.939	20.867	24.337
26	11.160	12.198	13.409	13.844	15.379	17.292	19.820	20.843	21.792	25.336
27	11.808	12.878	14.125	14.573	16.151	18.114	20.703	21.749	22.719	26.336
28	12.461	13.565	14.847	15.308	16.928	18.939	21.588	22.657	23.647	27.336
29	13.121	14.256	15.574	16.047	17.708	19.768	22.475	23.567	24.577	28.336
30	13.787	14.953	16.306	16.791	18.493	20.599	23.364	24.478	25.508	29.336
40	20.707	22.164	23.838	24.433	26.509	29.051	32.345	33.66	34.872	39.335
50	27.991	29.707	31.664	32.357	34.764	37.689	41.449	42.942	44.313	49.335
60	35.534	37.485	39.699	40.482	43.188	46.459	50.641	52.294	53.809	59.335



740

Table A.5 (continued) Critical Values of the Chi-Squared Distribution

Appendix A Statistical Tables and Proofs

v	α															
	0.30	0.25	0.20	0.10	0.05	0.025	0.02	0.01	0.005	0.001						
1	1.074	1.323	1.642	2.706	3.841	5.024	5.412	6.635	7.879	10.827						
2	2.408	2.773	3.219	4.605	5.991	7.378	7.824	9.210	10.597	13.815						
3	3.665	4.108	4.642	6.251	7.815	9.348	9.837	11.345	12.838	16.266						
4	4.878	5.385	5.989	7.779	9.488	11.143	11.668	13.277	14.860	18.466						
5	6.064	6.626	7.289	9.236	11.070	12.832	13.388	15.086	16.750	20.515						
6	7.231	7.841	8.558	10.645	12.592	14.449	15.033	16.812	18.548	22.457						
7	8.383	9.037	9.803	12.017	14.067	16.013	16.622	18.475	20.278	24.321						
8	9.524	10.219	11.030	13.362	15.507	17.535	18.168	20.090	21.955	26.124						
9	10.656	11.389	12.242	14.684	16.919	19.023	19.679	21.666	23.589	27.877						
10	11.781	12.549	13.442	15.987	18.307	20.483	21.161	23.209	25.188	29.588						
11	12.899	13.701	14.631	17.275	19.675	21.920	22.618	24.725	26.757	31.264						
12	14.011	14.845	15.812	18.549	21.026	23.337	24.054	26.217	28.300	32.909						
13	15.119	15.984	16.985	19.812	22.362	24.736	25.471	27.688	29.819	34.527						
14	16.222	17.117	18.151	21.064	23.685	26.119	26.873	29.141	31.319	36.124						
15	17.322	18.245	19.311	22.307	24.996	27.488	28.259	30.578	32.801	37.698						
16	18.418	19.369	20.465	23.542	26.296	28.845	29.633	32.000	34.267	39.252						
17	19.511	20.489	21.615	24.769	27.587	30.191	30.995	33.409	35.718	40.791						
18	20.601	21.605	22.760	25.989	28.869	31.526	32.346	34.805	37.156	42.312						
19	21.689	22.718	23.900	27.204	30.144	32.852	33.687	36.191	38.582	43.819						
20	22.775	23.828	25.038	28.412	31.410	34.170	35.020	37.566	39.997	45.314						
21	23.858	24.935	26.171	29.615	32.671	35.479	36.343	38.932	41.401	46.796						
22	24.939	26.039	27.301	30.813	33.924	36.781	37.659	40.289	42.796	48.268						
23	26.018	27.141	28.429	32.007	35.172	38.076	38.968	41.638	44.181	49.728						
24	27.096	28.241	29.558	33.196	36.415	39.364	40.270	42.980	45.558	51.179						
25	28.172	29.339	30.675	34.382	37.652	40.646	41.566	44.314	46.928	52.619						
26	29.246	30.435	31.795	35.563	38.885	41.923	42.856	45.642	48.290	54.051						
27	30.319	31.528	32.912	36.741	40.113	43.195	44.140	46.963	49.645	55.475						
28	31.391	32.620	34.027	37.916	41.337	44.461	45.419	48.278	50.994	56.892						
29	32.461	33.711	35.139	39.087	42.557	45.722	46.693	49.588	52.335	58.301						
30	33.530	34.800	36.250	40.256	43.773	46.979	47.962	50.892	53.672	59.702						
40	44.165	45.616	47.269	51.805	55.758	59.342	60.436	63.691	66.766	73.403						
50	54.723	56.334	58.164	63.167	67.505	71.420	72.613	76.154	79.490	86.660						
60	65.226	66.981	68.972	74.397	79.082	83.298	84.58	88.379	91.952	99.608						



國立臺灣科技大學 113 學年度碩士班招生試題

系所組別：工業管理系碩士班甲組、乙組

科目：統計學

(總分為 100 分；所有試題務必於答案卷內頁依序作答，否則不予計分)

Table A.6 F-Distribution Probability Table

741

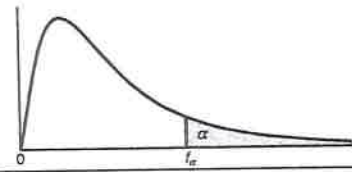


Table A.6 Critical Values of the F-Distribution

		$f_{0.05}(v_1, v_2)$								
		v_1								
v_2	1	2	3	4	5	6	7	8	9	
1	161.45	199.50	215.71	224.58	230.16	233.99	236.77	238.88	240.54	
2	18.51	19.00	19.16	19.25	19.30	19.33	19.35	19.37	19.38	
3	10.13	9.55	9.28	9.12	9.01	8.94	8.89	8.85	8.81	
4	7.71	6.94	6.59	6.39	6.26	6.16	6.09	6.04	6.00	
5	6.61	5.79	5.41	5.19	5.05	4.95	4.88	4.82	4.77	
6	5.99	5.14	4.76	4.53	4.39	4.28	4.21	4.15	4.10	
7	5.59	4.74	4.35	4.12	3.97	3.87	3.79	3.73	3.68	
8	5.32	4.46	4.07	3.84	3.69	3.58	3.50	3.44	3.39	
9	5.12	4.26	3.86	3.63	3.48	3.37	3.29	3.23	3.18	
10	4.96	4.10	3.71	3.48	3.33	3.22	3.14	3.07	3.02	
11	4.84	3.98	3.59	3.36	3.20	3.09	3.01	2.95	2.90	
12	4.75	3.89	3.49	3.26	3.11	3.00	2.91	2.85	2.80	
13	4.67	3.81	3.41	3.18	3.03	2.92	2.83	2.77	2.71	
14	4.60	3.74	3.34	3.11	2.96	2.85	2.76	2.70	2.65	
15	4.54	3.68	3.29	3.06	2.90	2.79	2.71	2.64	2.59	
16	4.49	3.63	3.24	3.01	2.85	2.74	2.66	2.59	2.54	
17	4.45	3.59	3.20	2.96	2.81	2.70	2.61	2.55	2.49	
18	4.41	3.55	3.16	2.93	2.77	2.66	2.58	2.51	2.46	
19	4.38	3.52	3.13	2.90	2.74	2.63	2.54	2.48	2.42	
20	4.35	3.49	3.10	2.87	2.71	2.60	2.51	2.45	2.39	
21	4.32	3.47	3.07	2.84	2.68	2.57	2.49	2.42	2.37	
22	4.30	3.44	3.05	2.82	2.66	2.55	2.46	2.40	2.34	
23	4.28	3.42	3.03	2.80	2.64	2.53	2.44	2.37	2.32	
24	4.26	3.40	3.01	2.78	2.62	2.51	2.42	2.36	2.30	
25	4.24	3.39	2.99	2.76	2.60	2.49	2.40	2.34	2.28	
26	4.23	3.37	2.98	2.74	2.59	2.47	2.39	2.32	2.27	
27	4.21	3.35	2.96	2.73	2.57	2.46	2.37	2.31	2.25	
28	4.20	3.34	2.95	2.71	2.56	2.45	2.36	2.29	2.24	
29	4.18	3.33	2.93	2.70	2.55	2.43	2.35	2.28	2.22	
30	4.17	3.32	2.92	2.69	2.53	2.42	2.33	2.27	2.21	
40	4.08	3.23	2.84	2.61	2.45	2.34	2.25	2.18	2.12	
60	4.00	3.15	2.76	2.53	2.37	2.25	2.17	2.10	2.04	
120	3.92	3.07	2.68	2.45	2.29	2.18	2.09	2.02	1.96	
∞	3.84	3.00	2.60	2.37	2.21	2.10	2.01	1.94	1.88	

Reproduced from Table 18 of *Biometrika Tables for Statisticians*, Vol. I, by permission of E.S. Pearson and the Biometrika Trustees.

