

國立台灣科技大學九十九學年度碩士班招生試題

系所組別：機械工程系碩士班丙組

科目：熱力與流力

(總分為100分)

總分100分, 所有答案必須寫於答案卷上, 寫於試題者不予計分

1. (20 pts) Please answer the following questions briefly and concisely.
 - I. Under what conditions is the ideal-gas assumption suitable for real gases? (3 pts)
 - II. What are the three mechanisms of heat transfer? (3 pts)
 - III. Does a heat engine that has a thermal efficiency of 100% necessarily violate (a) the first law and (b) the second law of thermodynamics? Explain. (4 pts)
 - IV. What is the 0th law and the 3rd law of thermodynamics? (4 pts)
 - V. Please explain the terminologies of streakline, streamline, pathline. (6 pts)

2. (15 pts) (a) Complete the following table for H₂O:

State	$T, ^\circ\text{C}$	P, kPa	$h, \text{kJ/kg}$	X	Phase description
1		200		0.7	
2	140		1800		Saturated mixture
3	350	800	3162.2	N/A	

Note: X is the quality of the saturated mixture, N/A for non-saturated state. (12 pts)

- (b) Please sketch the relative locations of states 1-3 in a T - v diagram of the water, where v is the specific volume. (3 pts)

3. (10 pts) Freshwater and seawater flowing in parallel horizontal pipelines are connected to each other by a double U-tube manometer, as shown in Fig.3. Determine the pressure difference between the two pipelines. Take the density of seawater at that location to be $\rho=1035 \text{ kg/m}^3$. Can the air column be ignored in the analysis? (The density of mercury is $\rho_{\text{mercury}}=13600 \text{ kg/m}^3$, the density of fresh water is $\rho=1000 \text{ kg/m}^3$, the density of air is $\rho=1.2 \text{ kg/m}^3$.) (8 pts & 2 pts)

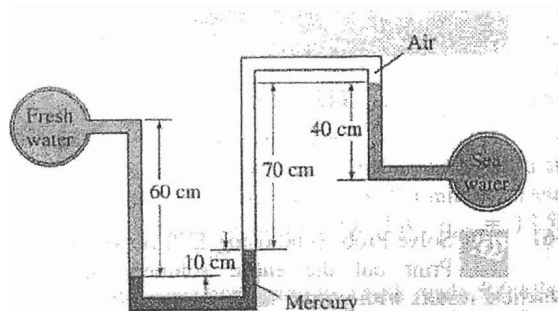


Fig. 3

4. (10 pts) Water is being heated in a vertical piston-cylinder device. The piston has mass of 20 kg and a cross-sectional area of 100 cm^2 . If the local atmospheric pressure is 100 kPa, determine the temperature at which the water in the piston starts boiling.



國立台灣科技大學九十九學年度碩士班招生試題

系所組別：機械工程系碩士班丙組

科目：熱力與流力

(總分為100分)

5. (10 pts) Heat in the amount of 100 kJ is transferred directly from a hot reservoir at 1200 K to a cold reservoir at 600 K. Calculate the entropy change of the two reservoirs and determine if the increase of entropy principle is satisfied. (7 pts & 3 pts)




Fig. 5

6. (10 pts) A cylindrical weir has a diameter of 3 m and a length of 6 m. Find the magnitude and the direction of the resultant force acting on the weir from the water.

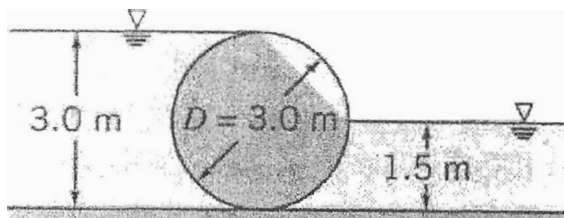


Fig. 6

7. (15 pts) Given: Flow with velocity components

$$u = 0, \quad v = -y^3 - 4z, \quad w = 3y^2z$$

Find:

- Is this one-, two- or three-dimensional flow? (2 pts)
 - Is this a steady flow? Please explain. (3 pts)
 - Demonstrate whether this is an incompressible or compressible flow. (5 pts)
 - If possible, derive a stream function for this flow. (5 pts)
8. (10 pts) One-dimensional unsteady flow in a thin liquid layer is described by the equation,

$$\frac{\partial u}{\partial t} + u \frac{\partial u}{\partial x} = -g \frac{\partial h}{\partial x}$$

Use a length scale, L , and a velocity scale, V_0 , to non-dimensionalize this equation. Obtain the dimensionless groups that characterize this flow. (6 pts & 4 pts)



國立台灣科技大學九十九學年度碩士班招生試題

系所組別：機械工程系碩士班丙組

科目：熱力與流力

(總分為100分)

Saturated water—Temperature table

Temp., T °C	Sat. press., P _{sat} kPa	Specific volume, m ³ /kg		Internal energy, kJ/kg			Enthalpy, kJ/kg			Entropy, kJ/kg · K		
		Sat. liquid, v _f	Sat. vapor, v _g	Sat. liquid, u _f	Evap., u _{fg}	Sat. vapor, u _g	Sat. liquid, h _f	Evap., h _{fg}	Sat. vapor, h _g	Sat. liquid, s _f	Evap., s _{fg}	Sat. vapor, s _g
0.01	0.6117	0.001000	206.00	0.000	2374.9	2374.9	0.001	2500.9	2500.9	0.0000	9.1556	9.1556
5	0.8725	0.001000	147.03	21.019	2360.8	2381.8	21.020	2489.1	2510.1	0.0763	8.9487	9.0249
10	1.2281	0.001000	106.32	42.020	2346.6	2388.7	42.022	2477.2	2519.2	0.1511	8.7488	8.8999
15	1.7057	0.001001	77.885	62.980	2332.5	2395.5	62.982	2465.4	2528.3	0.2245	8.5559	8.7803
20	2.3392	0.001002	57.762	83.913	2318.4	2402.3	83.915	2453.5	2537.4	0.2965	8.3696	8.6661
25	3.1698	0.001003	43.340	104.83	2304.3	2409.1	104.83	2441.7	2546.5	0.3672	8.1895	8.5567
30	4.2469	0.001004	32.879	125.73	2290.2	2415.9	125.74	2429.8	2555.6	0.4368	8.0152	8.4520
35	5.6291	0.001006	25.205	146.63	2276.0	2422.7	146.64	2417.9	2564.6	0.5061	7.8466	8.3517
40	7.3851	0.001008	19.515	167.53	2261.9	2429.4	167.53	2406.0	2573.5	0.5724	7.6832	8.2556
45	9.5953	0.001010	15.251	188.43	2247.7	2436.1	188.44	2394.0	2582.4	0.6386	7.5247	8.1633
50	12.352	0.001012	12.026	209.33	2233.4	2442.7	209.34	2382.0	2591.3	0.7038	7.3710	8.0748
55	15.763	0.001015	9.5639	230.24	2219.1	2449.3	230.26	2369.8	2600.1	0.7680	7.2218	7.9898
60	19.947	0.001017	7.6670	251.16	2204.7	2455.9	251.18	2357.7	2608.8	0.8313	7.0769	7.9082
65	25.043	0.001020	6.1935	272.09	2190.3	2462.4	272.12	2345.4	2617.5	0.8937	6.9360	7.8296
70	31.202	0.001023	5.0396	293.04	2175.8	2468.9	293.07	2333.0	2626.1	0.9551	6.7989	7.7540
75	38.597	0.001026	4.1291	313.99	2161.3	2475.3	314.03	2320.6	2634.6	1.0158	6.6655	7.6812
80	47.416	0.001029	3.4053	334.97	2146.5	2481.6	335.02	2308.0	2643.0	1.0756	6.5355	7.6111
85	57.868	0.001032	2.8261	355.96	2131.9	2487.8	356.02	2295.3	2651.4	1.1346	6.4089	7.5435
90	70.183	0.001036	2.3593	376.97	2117.0	2494.0	377.04	2282.5	2659.6	1.1929	6.2853	7.4782
95	84.609	0.001040	1.9808	398.00	2102.0	2500.1	398.09	2269.6	2667.6	1.2504	6.1647	7.4151
100	101.42	0.001043	1.6720	419.06	2087.0	2506.0	419.17	2256.4	2675.6	1.3072	6.0470	7.3542
105	120.90	0.001047	1.4186	440.15	2071.8	2511.9	440.28	2243.1	2683.4	1.3634	5.9319	7.2952
110	143.38	0.001052	1.2094	461.27	2056.4	2517.7	461.42	2229.7	2691.1	1.4188	5.8193	7.2382
115	169.18	0.001056	1.0360	482.42	2040.9	2523.3	482.59	2216.0	2698.6	1.4737	5.7092	7.1829
120	198.67	0.001060	0.89133	503.60	2025.3	2528.9	503.81	2202.1	2706.0	1.5279	5.6013	7.1292
125	232.23	0.001065	0.77012	524.83	2009.5	2534.3	525.07	2188.1	2713.1	1.5816	5.4956	7.0771
130	270.28	0.001070	0.66808	546.10	1993.4	2539.5	546.38	2173.7	2720.1	1.6346	5.3919	7.0265
135	313.22	0.001075	0.58179	567.41	1977.3	2544.7	567.75	2159.1	2726.9	1.6872	5.2901	6.9773
140	361.53	0.001080	0.50850	588.77	1960.9	2549.6	589.16	2144.3	2733.5	1.7392	5.1901	6.9294
145	415.68	0.001085	0.44600	610.19	1944.2	2554.4	610.64	2129.2	2739.8	1.7908	5.0919	6.8827
150	476.16	0.001091	0.39248	631.66	1927.4	2559.1	632.18	2113.8	2745.9	1.8418	4.9953	6.8371
155	543.49	0.001096	0.34648	653.19	1910.3	2563.5	653.79	2098.0	2751.8	1.8924	4.9002	6.7927
160	618.23	0.001102	0.30680	674.79	1893.0	2567.8	675.47	2082.0	2757.5	1.9426	4.8066	6.7492
165	700.93	0.001108	0.27244	696.46	1875.4	2571.9	697.24	2065.6	2762.8	1.9923	4.7143	6.7067
170	792.18	0.001114	0.24260	718.20	1857.5	2575.7	719.08	2048.8	2767.9	2.0417	4.6233	6.6650
175	892.60	0.001121	0.21659	740.02	1839.4	2579.4	741.02	2031.7	2772.7	2.0906	4.5335	6.6242
180	1002.8	0.001127	0.19384	761.92	1820.9	2582.8	763.05	2014.2	2777.2	2.1392	4.4448	6.5841
185	1123.5	0.001134	0.17390	783.91	1802.1	2586.0	785.19	1996.2	2781.4	2.1875	4.3572	6.5447
190	1255.2	0.001141	0.15636	806.00	1783.0	2589.0	807.43	1977.9	2785.3	2.2355	4.2705	6.5059
195	1398.8	0.001149	0.14089	828.18	1763.6	2591.7	829.78	1959.0	2788.8	2.2831	4.1847	6.4678
200	1554.9	0.001157	0.12721	850.46	1743.7	2594.2	852.26	1939.8	2792.0	2.3305	4.0997	6.4302

